


WSU Music Theory Placement Practice Exam

Pitch: Identify the pitches below in the clef indicated:



Key Signatures: Identify the major key in the clef indicated:

1.	2.	3.	4.	5.
G major	_____	_____	_____	_____

6.	7.	8.	9.	10.
_____	_____	_____	_____	_____

Key Signatures: Identify the minor key in the clef indicated:

1.	2.	3.	4.	5.
E minor	_____	_____	_____	_____

6.	7.	8.	9.	10.
_____	_____	_____	_____	_____

Intervals: Identify the numerical size of each interval (do not indicate quality)

a.  6

b.  _____

c.  _____

d.  _____

e.  _____

f.  _____


g.  _____


h.  _____


i.  _____


j.  _____


Triads: Identify the triad quality of each triad


a.  M

b.  _____

c.  _____

d.  _____

e.  _____

f.  _____

Rhythm and Meter: For the following rhythms, write in the correct time signature:

1.



2.



3.



4.

